
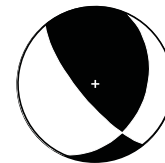




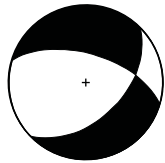
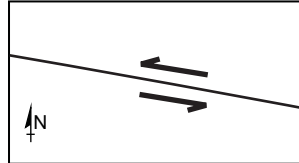



NAME \_\_\_\_\_





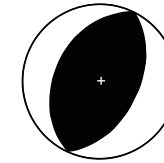
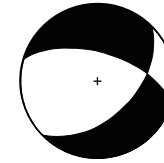
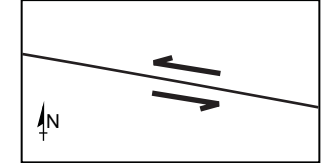
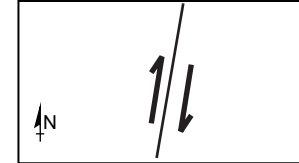

Name the type of faults shown in each of these focal mechanism plots (in words) and draw the two possible faults onto the maps (with correct map symbols). One example has been completed for you.

**Fault type****Possible Map 1****Possible Map 2**conjugate  
strike-slip

Rate your confidence in your answers: not at all 1 2 3 4 5 very sure

NAME \_\_\_\_\_

Name the type of faults shown in each of these focal mechanism plots (in words) and draw the two possible faults onto the maps (with correct map symbols). One example has been completed for you.

**Fault type****Possible Map 1****Possible Map 2**conjugate  
strike-slip

Rate your confidence in your answers: not at all 1 2 3 4 5 very sure